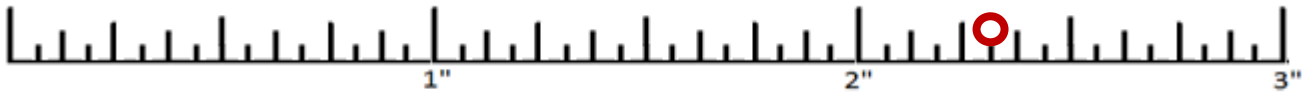


Answer Key: Measurement Worksheet 2

Add the measurements, put the answer on the line, then circle and label on the measuring lines provided.

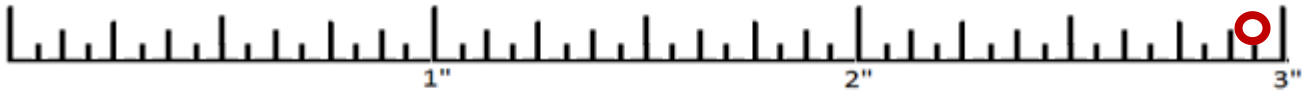
$$1\frac{1}{8} + 1\frac{3}{16}$$

$$= 2\frac{5}{16}$$



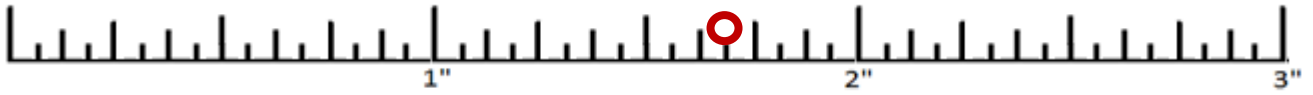
$$2\frac{1}{16} + \frac{7}{8}$$

$$= 2\frac{15}{16}$$



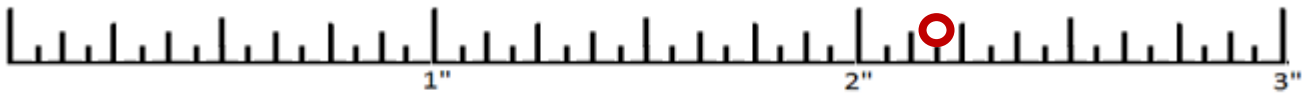
$$\frac{3}{8} + 1\frac{5}{16}$$

$$= 1\frac{11}{16}$$



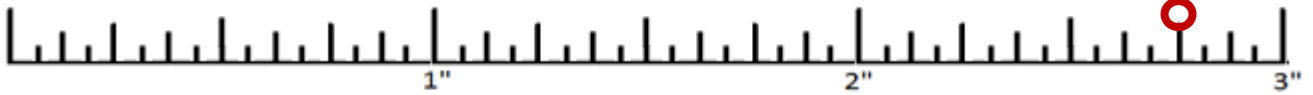
$$1\frac{7}{16} + \frac{3}{4}$$

$$= 2\frac{3}{16}$$



$$\frac{15}{16} + 1\frac{13}{16}$$

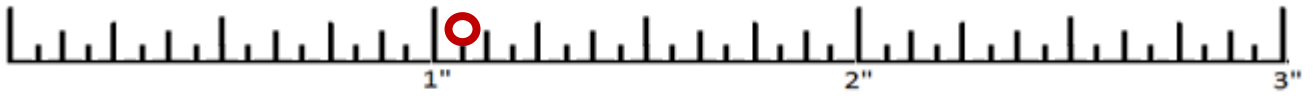
$$= 2\frac{3}{4}$$



Subtract the measurements, then circle and label on the measuring lines provided.

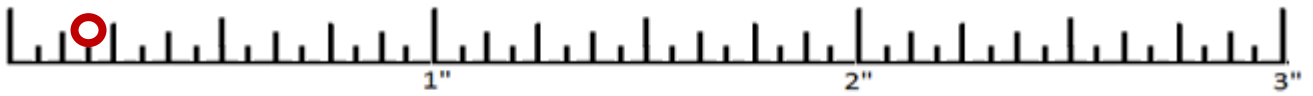
$$2\frac{3}{8} - 1\frac{5}{16}$$

$$= 1\frac{1}{16}$$




$$1\frac{15}{16} - 1\frac{3}{4}$$

$$= \frac{3}{16}$$



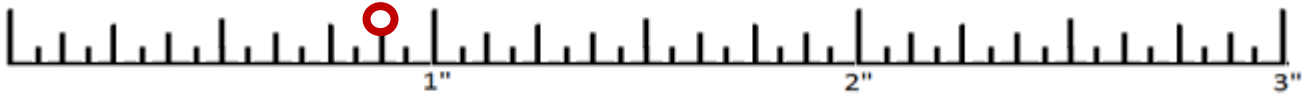
$$2\frac{7}{8} - 2\frac{11}{16}$$

$$= \frac{3}{16}$$



$$1\frac{13}{16} - \frac{15}{16}$$

$$= \frac{7}{8}$$



$$1\frac{3}{16} - \frac{5}{8}$$

$$= \frac{9}{16}$$

